

BSc 5th sem practical examination 2020

B.B.K. College, Nagaon, Barpeta

Sub: Zoology (Major)

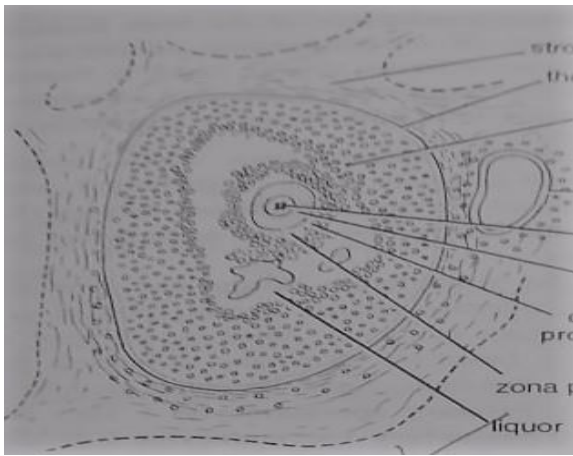
Paper-506

Full marks: 75


Time: 4 hours

1. Write down the principle and procedure of estimation of proteins in an unknown sample. State the significance of proteins in biological system.
5+ 6+ 3 =14
2. Write down the procedure of detection of monosaccharaides from a given sample. State the significance of monosaccharaides in living system.
8 + 5= 13
3. Draw a labeled diagram of pituitary gland of a fish. Write down the significance of the gland.
5 + 5=10
4. Identify the photographs D, E, F, G, H. Write two identifying characters for each
5 *2 =10
5. Laboratory note book 8
6. Viva-voce 10
7. Internal assessment 10

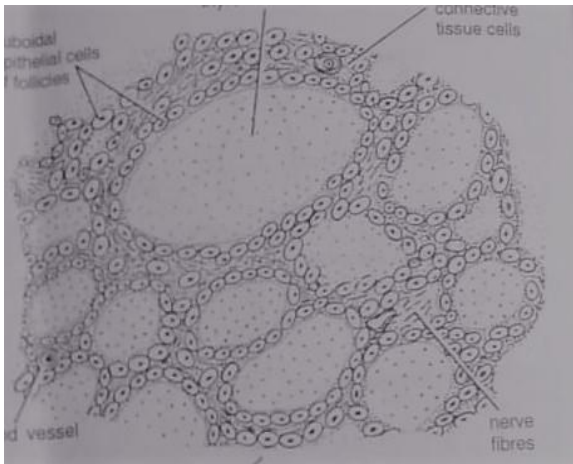
IDENTIFICATION (Q. No-4)



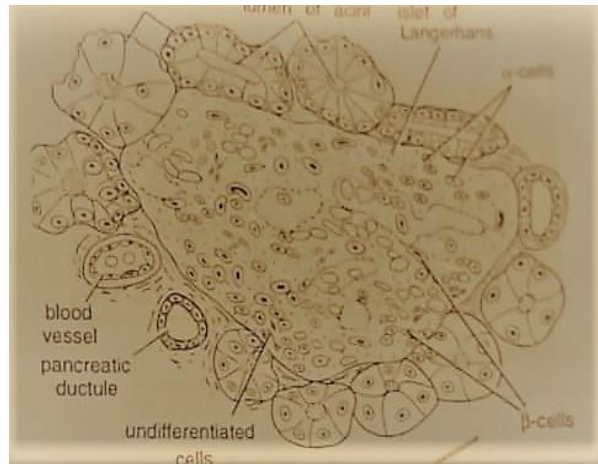
D



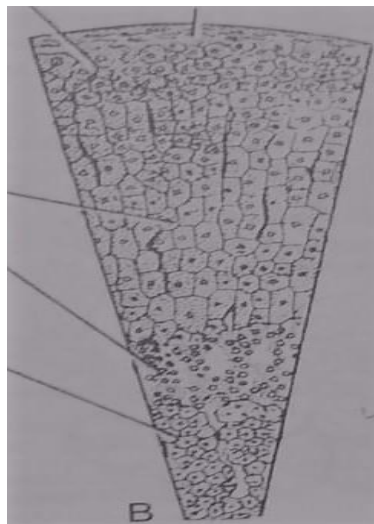
E



F



G



H